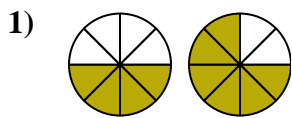


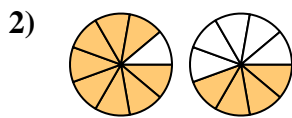


Determine which letter best compares the fractions shown.

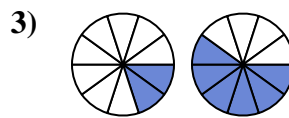
**Answers**



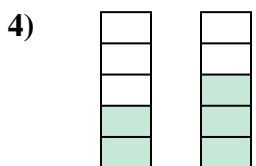
- A.  $\frac{4}{4} < \frac{2}{6}$
- B.  $\frac{4}{4} > \frac{6}{2}$
- C.  $\frac{4}{8} < \frac{6}{8}$
- D.  $\frac{4}{8} > \frac{6}{8}$



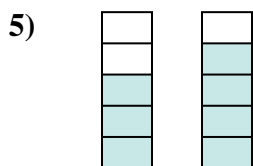
- A.  $\frac{1}{8} > \frac{5}{4}$
- B.  $\frac{8}{9} > \frac{4}{9}$
- C.  $\frac{8}{9} < \frac{4}{9}$
- D.  $\frac{9}{8} > \frac{9}{4}$



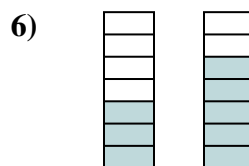
- A.  $\frac{2}{8} > \frac{6}{4}$
- B.  $\frac{8}{2} > \frac{4}{6}$
- C.  $\frac{2}{10} < \frac{6}{10}$
- D.  $\frac{10}{2} > \frac{10}{6}$



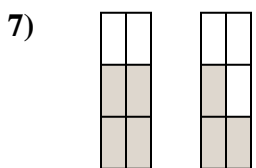
- A.  $\frac{2}{3} > \frac{3}{2}$
- B.  $\frac{3}{2} > \frac{2}{3}$
- C.  $\frac{2}{5} < \frac{3}{5}$
- D.  $\frac{3}{2} < \frac{2}{3}$



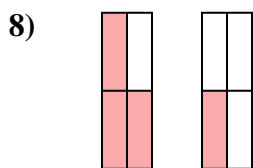
- A.  $\frac{3}{2} < \frac{4}{1}$
- B.  $\frac{3}{5} < \frac{4}{5}$
- C.  $\frac{3}{2} > \frac{4}{1}$
- D.  $\frac{2}{3} > \frac{1}{4}$



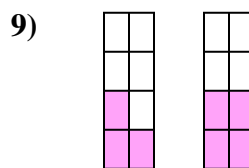
- A.  $\frac{3}{7} < \frac{5}{7}$
- B.  $\frac{3}{4} > \frac{5}{2}$
- C.  $\frac{7}{3} > \frac{7}{5}$
- D.  $\frac{3}{7} > \frac{5}{7}$



- A.  $\frac{4}{6} < \frac{3}{6}$
- B.  $\frac{4}{2} > \frac{3}{3}$
- C.  $\frac{4}{6} > \frac{3}{6}$
- D.  $\frac{4}{2} < \frac{3}{3}$



- A.  $\frac{1}{3} < \frac{3}{1}$
- B.  $\frac{4}{3} > \frac{4}{1}$
- C.  $\frac{3}{4} > \frac{1}{4}$
- D.  $\frac{3}{1} > \frac{1}{3}$

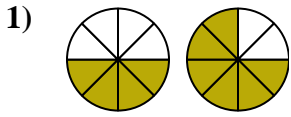


- A.  $\frac{3}{8} < \frac{4}{8}$
- B.  $\frac{3}{5} > \frac{4}{4}$
- C.  $\frac{3}{8} > \frac{4}{8}$
- D.  $\frac{5}{3} < \frac{4}{4}$

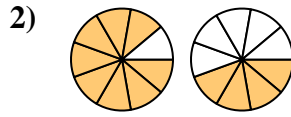
- 1. \_\_\_\_\_
- 2. \_\_\_\_\_
- 3. \_\_\_\_\_
- 4. \_\_\_\_\_
- 5. \_\_\_\_\_
- 6. \_\_\_\_\_
- 7. \_\_\_\_\_
- 8. \_\_\_\_\_
- 9. \_\_\_\_\_



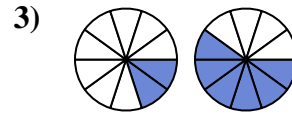
Determine which letter best compares the fractions shown.



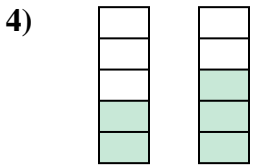
- A.  $\frac{4}{4} < \frac{2}{6}$
- B.  $\frac{4}{4} > \frac{6}{2}$
- C.  $\frac{4}{8} < \frac{6}{8}$
- D.  $\frac{4}{8} > \frac{6}{8}$



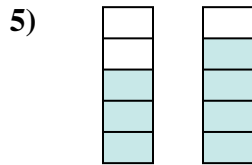
- A.  $\frac{1}{8} > \frac{5}{4}$
- B.  $\frac{8}{9} > \frac{4}{9}$
- C.  $\frac{8}{9} < \frac{4}{9}$
- D.  $\frac{9}{8} > \frac{9}{4}$



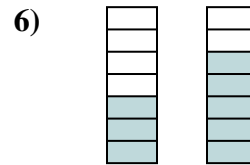
- A.  $\frac{2}{8} > \frac{6}{4}$
- B.  $\frac{8}{2} > \frac{4}{6}$
- C.  $\frac{2}{10} < \frac{6}{10}$
- D.  $\frac{10}{2} > \frac{10}{6}$



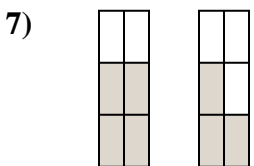
- A.  $\frac{2}{3} > \frac{3}{2}$
- B.  $\frac{3}{2} > \frac{2}{3}$
- C.  $\frac{2}{5} < \frac{3}{5}$
- D.  $\frac{3}{2} < \frac{2}{3}$



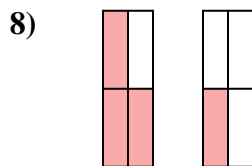
- A.  $\frac{3}{2} < \frac{4}{1}$
- B.  $\frac{3}{5} < \frac{4}{5}$
- C.  $\frac{3}{2} > \frac{4}{1}$
- D.  $\frac{2}{3} > \frac{1}{4}$



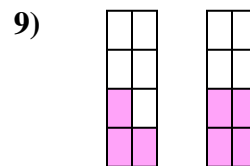
- A.  $\frac{3}{7} < \frac{5}{7}$
- B.  $\frac{3}{4} > \frac{5}{2}$
- C.  $\frac{7}{3} > \frac{7}{5}$
- D.  $\frac{3}{7} > \frac{5}{7}$



- A.  $\frac{4}{6} < \frac{3}{6}$
- B.  $\frac{4}{2} > \frac{3}{3}$
- C.  $\frac{4}{6} > \frac{3}{6}$
- D.  $\frac{4}{2} < \frac{3}{3}$



- A.  $\frac{1}{3} < \frac{3}{1}$
- B.  $\frac{4}{3} > \frac{4}{1}$
- C.  $\frac{3}{4} > \frac{1}{4}$
- D.  $\frac{3}{1} > \frac{1}{3}$



- A.  $\frac{3}{8} < \frac{4}{8}$
- B.  $\frac{3}{5} > \frac{4}{4}$
- C.  $\frac{3}{8} > \frac{4}{8}$
- D.  $\frac{5}{3} < \frac{4}{4}$

**Answers**

- 1.     **C**
- 2.     **B**
- 3.     **C**
- 4.     **C**
- 5.     **B**
- 6.     **A**
- 7.     **C**
- 8.     **C**
- 9.     **A**